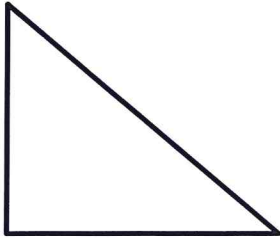


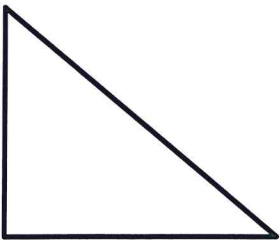
**Trigonometry**  
Emphasis on SOH – CAH – TOA

Evaluate the six trigonometric functions for the regular right triangle for  $\angle A$ .


1.  $a = 10$  &  $b = 24$




2.  $a = 3$  &  $b = 8$




3.  $b = 8$  &  $c = 11$



4.  $a = 7$  &  $c = 15$



5.  $a = 9$  &  $c = 14$



6.  $b = 8$  &  $c = 2\sqrt{17}$

